

# Magnolia School

## Rising 1st Grade Summer Math Packet

Dearest Monarchs,

We hope you are having a wonderful start to your summer! Over the coming weeks, we would like you to take some time to work on keeping your math skills sharp. Please complete the following pages and bring them with you on the first day of school. Remember to show your work and use additional paper if necessary.

Keep reviewing your math facts, too! Use flash cards, review with a family member, or maybe even go outside and practice those facts with some sidewalk chalk!


We are looking forward to seeing you in school soon!



Name \_\_\_\_\_



Write the number.




tens	ones

\_\_\_\_\_  
-----  
\_\_\_\_\_



Add or subtract.



tens	ones

\_\_\_\_\_  
-----  
\_\_\_\_\_



$$3 + 1 = \underline{\quad}$$

-----  
\_\_\_\_\_



$$7 - 4 = \underline{\quad}$$

-----  
\_\_\_\_\_



$$\begin{array}{r} 5 \\ + 4 \\ \hline \end{array}$$


-----  
\_\_\_\_\_




$$\begin{array}{r} 5 \\ - 3 \\ \hline \end{array}$$







-----  
\_\_\_\_\_

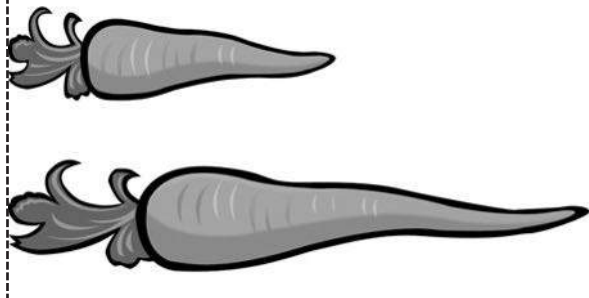
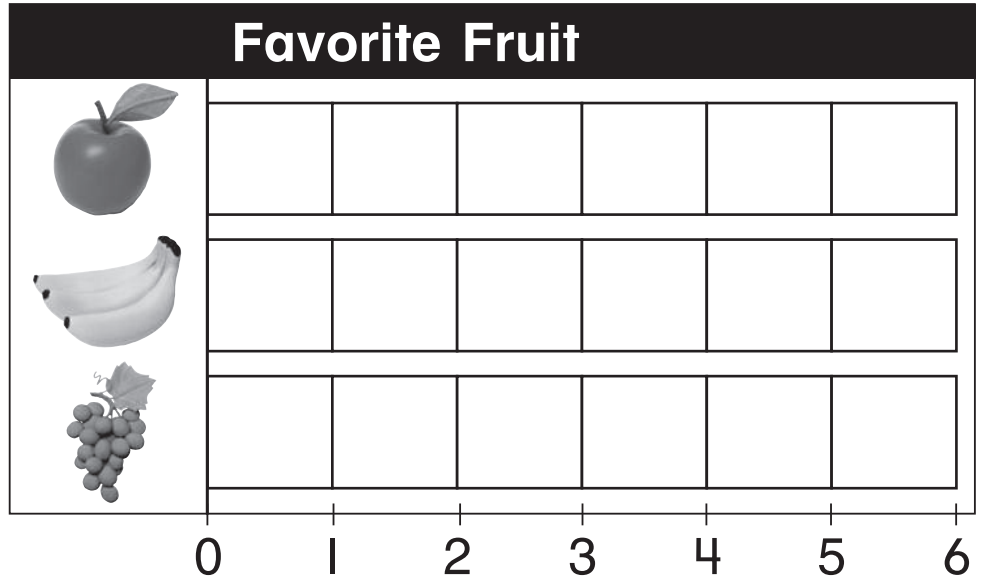
Name \_\_\_\_\_

 Use the tally chart to complete the bar graph.  Circle the one that is shorter.

 Circle the coins you need to buy the toy.







Favorite Fruit	
Fruit	Tally
	
	
	



27¢

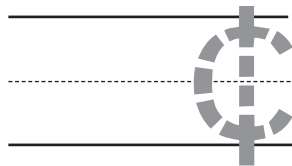


Name \_\_\_\_\_

-  Write the numbers in order from 1 to 10.
-  Count the coins. Write the total amount.
-  Circle the one that is heavier.
-  Circle odd or even.



\_\_\_\_\_  
\_\_\_\_\_  
\_\_\_\_\_, 2, \_\_\_\_\_, \_\_\_\_\_, 5, \_\_\_\_\_, \_\_\_\_\_, 8, 9, \_\_\_\_\_








odd

10

even


Name \_\_\_\_\_

 Circle the pattern rule. Then circle the shape that comes next.



Name \_\_\_\_\_


 Write the time.  Write how many. X the one that does not belong.



\_\_\_\_\_

-----

\_\_\_\_\_ o'clock



\_\_\_\_\_

-----

\_\_\_\_\_

Name \_\_\_\_\_

♥ Count the objects. Write how many.    🦋 Circle the shape that has one fourth colored.



\_\_\_\_\_

-----

\_\_\_\_\_

